



Maths Accelerator Centre

1 Marine Parade Central, #12-03, Parkway Centre, S 449408

Tel/SMS/Whatsapp : 87257203 Email : maths.accelerator.centre@gmail.com


Pri 3 & P4 : Problem Sum Mini Course

Term 4 Lesson 2

1. Strategy : Heuristics
2. Higher Order Trending Questions

Your Child Can Improve

1-2 Grade Using
Our Simple 5-Step
S.C.O.R.E. System



**Book Your
Free Trial Now**

8725-7203

Or Click

<http://www.parkwaymath.com/>

Class Schedule for 2023

Primary Math Schedule: <http://www.parkwaymath.com/schedule-pri/>

Secondary Math Schedule: <http://www.parkwaymath.com/schedule-sec/>

Upcoming Events

Pri4/Pri 5 : SA2 Revision Booster Class

Click Here For

Class Schedule & Fees

<http://www.parkwaymath.com/programmes/>

3. Sara has \$ 100 and Jana has \$ 40. How much money must Sara give to Jana so that Jana has \$ 40 more than Sara?

Trending Exam Questions

1. Terry had \$ 392 and Willy had \$ 47 at first.
Their father gave each of them an equal amount of money.
In the end, Terry had 6 times as much money as Willy.
How much money did their father gave to each of them?

P4/KCP/SA2

- 2 Rectangles and circles are used to form patterns as shown in Figure 1 to Figure 3.

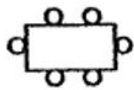


Figure 1

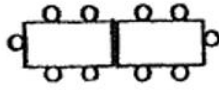


Figure 2

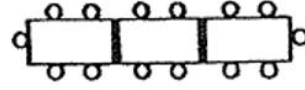


Figure 3

Figure number	Number of rectangles	Number of circles
1	1	6
2	2	10
3	3	14

- (a) How many rectangles are there in Figure 10?
- (b) How many rectangles are there in a pattern with 98 circles?

P4/CHS/SA2

3. James had \$16.40. He wanted to buy 3 notebooks and 1 pencil case , but he was short of \$3.30.

ACSI/SA2/23

(a) What was the total cost of the 3 notebooks and 1 pencil case ?

(b) The pencil case cost \$2.90 more than each notebook. What was the cost of 1 notebook?

4. Venus and Melvin were given some money. Venus spent $\frac{1}{4}$ of her money and had \$141 left.

ACSJ/SA2/23

(a) How much did Venus spend?

[1]

- (b) Melvin spent two times as much as Venus. He had $\frac{2}{3}$ of his money left.
How much did Melvin have in the end?